

Unit 2 HW 15

Name Key No Work

Date _____ Period _____

Simplify

1. $2(7)^2 - 90$

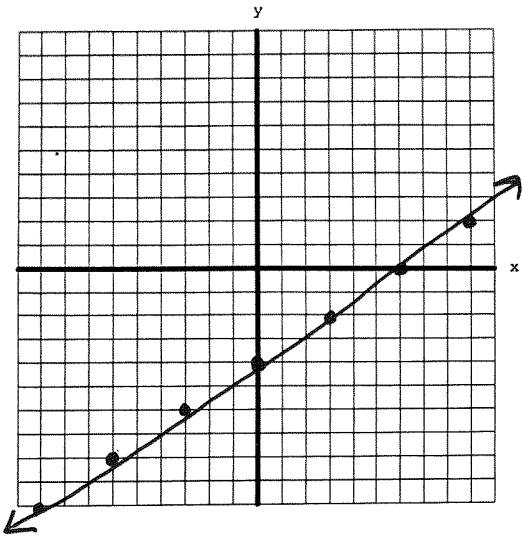
8

2. $-8(-3)^2 - 15(-3) + 27$

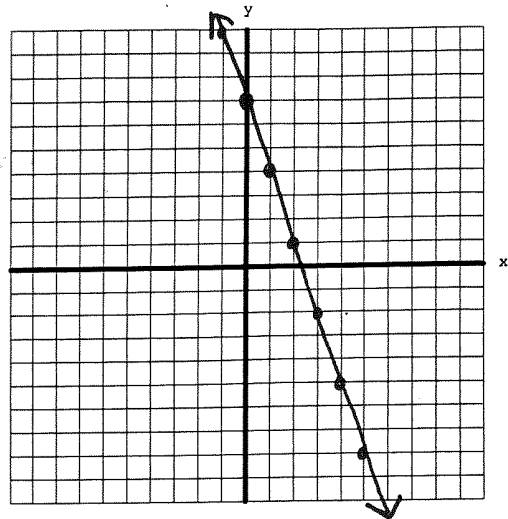
0

Graph each linear equation.

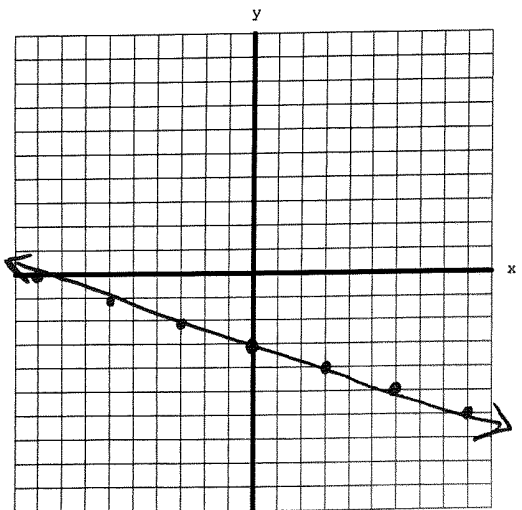
3. $y = \frac{2}{3}x - 4$



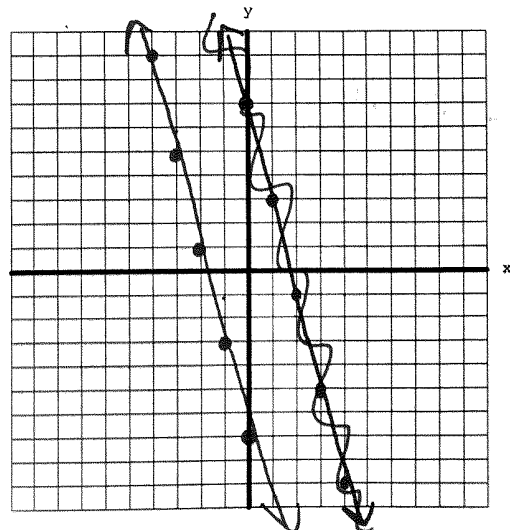
4. $y = -3x + 7$



5. $2x + 6y = -18$



6. $-8x - 2y = 14$



Unit 2 HW 15

Name _____

Date _____

Period _____

7. At PETCO, Mrs. Pischke spent \$84.50 on 3 bags of dog food and 4 dog toys. Mr. Belby spent \$99.25 on 4 bags of dog food and 3 dog toys. How much does each bag of dog food and each dog toy cost?

\$ 5.75 per toy

\$ 20.50 per bag of food

8. Solve the system of equations by ~~elimination~~ ^{substitution}.

$$\begin{cases} y = 2x + 48 \\ -2x + 5y = 24 \end{cases}$$

$(-27, -6)$

9. Solve the system of equations by ~~substitution~~ ^{elimination}.

$$\begin{cases} 13x + y = -29 \\ 4x - 3y = 44 \end{cases}$$

$(-1, -16)$